













Name: _____ Date: _____

Counting Money Worksheet

Write the value of the money in cents.

1.	
2.	
3.	
4.	
5.	
6.	
7.	
8.	
9.	
10.	
11.	
12.	

Name: _____ Date: _____

Name: _____ Date: _____

Answer Key

1. \$1.00
2. \$1.00
3. 65 cents
4. \$1.00
5. 35 cents
6. \$1.00
7. \$1.00
8. \$1.00
9. 75 cents
10. \$1.00
11. 65 cents
12. 40 cents